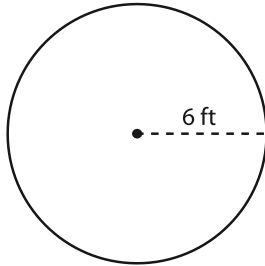


Area - Mixed Shapes

Level 1: S1

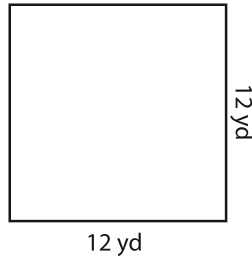
Find the area of each figure.

1)



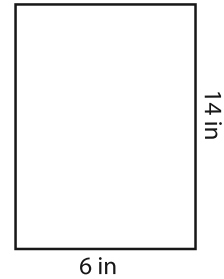
Area = _____

2)



Area = _____

3)



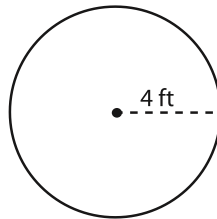
Area = _____

4)



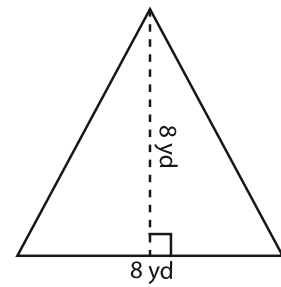
Area = _____

5)



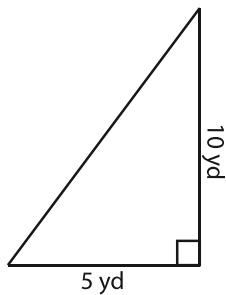
Area = _____

6)



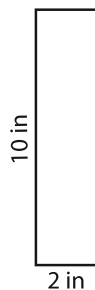
Area = _____

7)



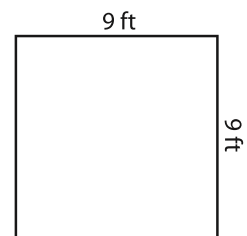
Area = _____

8)



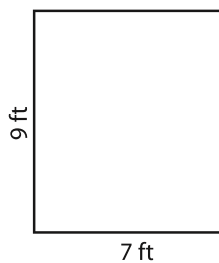
Area = _____

9)



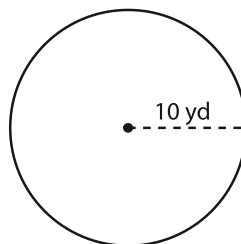
Area = _____

10)



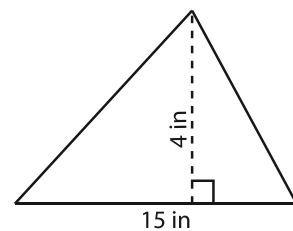
Area = _____

11)



Area = _____

12)



Area = _____